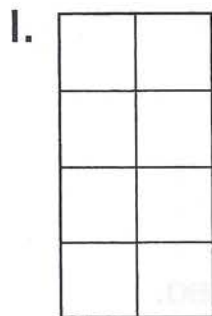


In and Around the Shapes

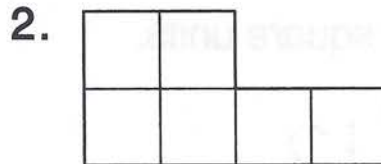
Find the perimeter and the area of each shape.

Visual Thinking



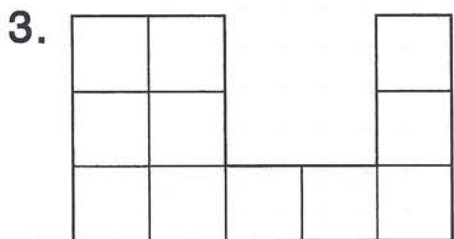
Perimeter: _____ units

Area: _____ square units




Perimeter: _____ units

Area: _____ square units



Perimeter: _____ units

Area: _____ square units



Perimeter: _____ units

Area: _____ square units

5. Color the shape with the longest perimeter red.

6. Color the shape with the smallest area blue.